

**Holiday
Homework**

Class V





Summer Vacation

Dear Parents,

- Long awaited Summer Holidays have commenced. It is a time to relax, rejuvenate, refresh and regain health. It is also a time to reduce stress & increase productivity.
- Spend quality time with your kids and inculcate values.
- Help and guide your ward in doing Holiday Homework.
- Encourage your ward to converse in English.
- Do some kind of physical exercises with your kids.
- Read the Newspaper every day and encourage your ward to do so.

BE HEALTHY, BE HAPPY

Regards

GTB 011- 46575555

HAPPY
Holidays



Worksheet : 1**Subject: English****Class: 5**

Name: _____ Class & Sec. _____ Roll No. _____ Date: _____

Q1. Read the following sentences. Identify the underlined nouns. Then write which type of noun it is.

1. This is my mother's saree. _____
2. The children stopped on a colony of ants in the garden. _____
3. My father is an architect. _____
4. Knowledge is power. _____
5. I followed the advice of my mother. _____
6. William Shakespeare was known for his wisdom. _____

Q2. Choose the correct plural to be filled in each of the following sentence.

1. I enjoy eating _____. (baryes/berries)
2. Kim has two _____ (child/children) aged two and five.
3. The easiest way to catch _____ (mouse/mice) is to set a trap.
4. I can see _____ (people/person) walking across the street.
5. I love green _____. (peases/peas)

Q3. Rewrite the following sentences changing the gender of each underlined noun.

1. There was a mare in the farm house.

2. The Emperor wore a beautiful costume.

3. My niece is very naughty.

4. A deer was grazing the grass.

5. Who is the main hero in the act?

Q4. Read the following sentences. Then write which type of sentence it is.

1. Who is your best friend? _____

2. Such a beautiful view it was! _____

3. Don't waste food. _____

4. I will spend my holidays with granny. _____

5. He is not an ordinary man. _____

Q5. Circle the subject and underline the predicate in the following sentences.

1. Lavi chose the right option.

2. Shanky is excited about his holiday plans.

3. Rohini and Shaan sing well.

4. My mother bakes delicious cakes.

कार्य पत्रिका 1

कक्षा – पाँच

नाम _____ कक्षा वर्ग _____ दिनांक _____

प्रश्न-1 निम्नलिखित शब्दों को भाववाचक संज्ञा में बदलिए।

1. उदार - _____
2. साधु - _____
3. निज - _____
4. शीघ्र - _____
5. बुरा - _____
6. मीठा - _____
7. सजना - _____
8. हरा - _____

प्रश्न - 2 निम्नलिखित मुहावरों के अर्थ लिखो।

1. कलेजा फटना - _____
2. भाग्य का मारा होना - _____
3. मुँह ताकना - _____
4. अपने सिर लेना - _____

प्रश्न-3 नीचे दिए गए शब्दों के लिंग बदलकर लिखो।

1. युवक - _____
2. शिष्य - _____
3. भाग्यवती - _____
4. महारानी - _____
5. सेवक - _____
6. राजा - _____

प्रश्न-4 निम्नलिखित संयुक्ताक्षरों से दो-दो शब्द बनाए।

1. ष - _____, _____

2. क्त - _____, _____

3. क्ख - _____, _____

Worksheet : 1**Subject: Punjabi****Class: 5****Name:** _____**Class & Sec.** _____**Roll No.** _____**Date:** _____ਪਾਠ -2 ਪੌਸ਼ਟਿਕ ਭੋਜਨ

ਪ੍ਰਸ਼ਨ 1 ਹੇਠ ਲਿਖੇ ਸ਼ਬਦਾਂ ਦੇ ਲਿੰਗ ਬਦਲੋ:-

(ੳ) ਬੇਟੀ - _____

(ਅ) ਅਧਿਆਪਕਾ - _____

(ੲ) ਡਾਕਟਰਨੀ - _____

(ਸ) ਮੰਮੀ - _____

ਪ੍ਰਸ਼ਨ 2 ਹੇਠ ਲਿਖੇ ਸ਼ਬਦਾਂ ਦੇ ਅਰਥ ਲਿਖੋ:-

(ੳ) ਭਰੋਸਾ - _____

(ਅ) ਫਿਕਰ - _____

(ੲ) ਪਰੇਸ਼ਾਨ - _____

(ਸ) ਚਿੰਤਾ - _____

ਪ੍ਰਸ਼ਨ 3 ਹੇਠ ਲਿਖੇ ਸ਼ਬਦਾਂ ਦੇ ਉੱਤਰ ਦਿਉ:-

(ੳ) ਡਾਕਟਰ ਨੇ ਪਿੰਕੂ ਦੀ ਪੇਟ ਦਰਦ ਦਾ ਕੀ ਕਾਰਨ ਦੱਸਿਆ?

ਉੱਤਰ _____

(ਅ) ਨੂਰ ਤੋਂ ਪੈਸੇ ਲੈ ਕੇ ਪਿੰਕੂ ਕਿੱਥੇ ਜਾਂਦਾ ਸੀ?

ਉੱਤਰ _____

(ੲ) ਪਿੰਕੂ ਦੇ ਟਿਫ਼ਿਨ ਵਿੱਚ ਕਿਸ ਤਰ੍ਹਾਂ ਦਾ ਭੋਜਨ ਹੁੰਦਾ ਸੀ?

ਉੱਤਰ

Worksheet : 1**Subject: French****Class: 5****Name:** _____ **Class & Sec.** _____ **Roll No.** _____ **Date:** _____**Q1. Écrivez en français.**

1. what is your name? (to a friend) - _____
2. Good morning - _____
3. Good night - _____
4. Good evening- _____
5. How are you? (to an adult) - _____
6. I am sorry - _____
7. Thank you - _____
8. See you soon- _____
9. See you tomorrow - _____
10. Hello - _____

Q2 Retrouvez les mots.

1. ALTUS - _____
2. JONBUOR - _____
3. IMECR - _____
4. OSNOIBR - _____
5. OBN PÉATTIP - _____

Q3. Répondez aux questions.

1. Comment tu t'appelles?

2. Comment allez-vous?

3. Quel âge as-tu?

4. Où habites-tu?

Q4. Complétez le dialogue.

A: Salut!

B: _____

A: _____

B: Ça va bien merci.

A: _____

B: Je m'appelle B et toi?

A: _____

B: Au revoir, _____

A: _____

Worksheet : 1**Subject: Mathematics****Class: 5****Name:** _____**Class & Sec.** _____**Roll No.** _____**Date:** _____**Q1. Add**

$$\begin{array}{r} \text{a) } 765428097 \\ + 89356893 \\ \hline \\ \hline \end{array}$$

$$\begin{array}{r} \text{b) } 890341265 \\ 218126459 \\ + 742958003 \\ \hline \\ \hline \end{array}$$

Q2. Subtract the following

$$\begin{array}{r} \text{a) } 558258014 \\ - 72102162 \\ \hline \\ \hline \end{array}$$

Q3. Simplify: $4,35,06,789 + 59,67,892 + 25,76,19,517 - 19,76,635$ **Q4. Find the product**

a) 605×1000 _____

b) 695×30000 _____

c) 732×900 _____

Q5. Multiply

$$\begin{array}{r} \text{a) } 6584 \\ \times 408 \\ \hline \end{array}$$

$$\begin{array}{r} \text{b) } 5098 \\ \times 7040 \\ \hline \end{array}$$

Q6. A builder constructs 40 flats in a society. If each flat costs Rs. 54,90,560, what is the total cost of all the flats?

--

Q7. Divide and check you answer

a) $14,375 \div 16$

--	--

b) $79,03,019 \div 99$

--	--

Q9. Multiply the greatest 5-digit number with the greatest 2-digit number.

--

Worksheet : 1**Subject: Science****Class: 5****Name:** _____ **Class & Sec.** _____ **Roll No.** _____ **Date:** _____**REPRODUCTION IN PLANTS****Q1. Fill in the blanks:**

1. Roots of some plants not only store food but also produce new plants. They are known as _____.
2. Seeds which have only one cotyledon are known as _____.
3. Seeds which have two cotyledons are known as _____.
4. The spot where the seed is attached to the plant is known as _____.
5. The process of spreading seed to different places is called _____.
6. The practice of growing crops on a large scale for food or other purpose is termed as _____.
7. The chemicals used to destroy harmful insects on plants are called _____.
8. The baby plant is also known as _____.
9. _____ is a bulb shaped underground stem.

Q2. Name the following:

1. Two plants that reproduce from spore:

2. Two underground stems

3. Two plants that reproduce by roots

4. Two plants that reproduce by leaves

5. Two examples of monocot seeds

6. Two examples of dicot seeds

7. Two plants that disperse their seed by wind

8. Two plants that disperse their seeds by explosion

9. Two plants that disperse their seeds by water.


Q3. Answer the following questions.

a) What is germination?

b) What is the importance of cotyledon?

c) Name different stages of crop production?

d) Name different types of seeds with example.

IV. Draw a well labelled diagram of life cycle of plant.

Worksheet : 1**Subject: Social Studies****Class: 5****Name:** _____**Class & Sec.** _____**Roll No.** _____**Date:** _____**Chapter 1 Know Your Planet****Q1. Fill in the blanks:**

1. The large _____ bodies on the earth are called oceans.
2. The earth is _____ in Shape.
3. A _____ is a model of the earth.
4. The first person who published a collection of maps was _____
5. The needle of the compass always points towards _____ direction
6. One of the earliest surviving globes is the _____ or earth apple.
7. _____ and colours are used to represent different features on a map.
8. The word 'map' comes from the Latin word mappo which means a _____
9. There are seven _____ and _____ Oceans in the world.
10. A _____ is given on a map to help us understand the colour scheme and the symbols used.

Q2. Define the following terms:

1. Sphere _____

2. Map _____

3. Intermediate directions _____

4. Symbols _____

5. Scale _____

Worksheet : 1**Subject: Computer****Class: 5**

Name: _____ **Class & Sec.** _____ **Roll No.** _____ **Date:** _____

Q1. Select the correct answer:

1. This is also known as Read/Write memory?

- | | |
|---------------|------------------|
| i. RAM | iii. ROM |
| ii. Secondary | iv. Smart Lookup |

2. What is the storage capacity of Flash drive?

- | | |
|----------|-----------------------|
| i. 10GB | iii. 5GB |
| ii. 16GB | iv. None of the Above |

3. It is the first screen that appears when we start the computer.

- | | |
|---------------|-----------------------|
| i. Icon | iii. Desktop |
| ii. Wallpaper | iv. None of the Above |

Q2. Fill in the blanks:

- Computers of _____ generation were as big as a room.
- Fourth generation computers use _____.
- _____ is used to view and manage files and folders.

Q3. Answer the following:

1. Write the full form.

- | | |
|-------------|-------|
| I. VLSIC | _____ |
| II. DVD | _____ |
| III. EEPROM | _____ |

2. How many generations are there in computers? Name them.

Ans. _____

3. List any two features of Windows10.

Ans. _____

4. What is File Explorer?

Ans. _____


Worksheet : 2

Subject: English

Class: 5

Name: _____ Class & Sec. _____ Roll No. _____ Date: _____

Q1. Look at the picture given below and write 60-80 words describing the picture.



Q2. Read the following passage and answer the questions that follow.

The sun is a star, just one of billions of stars in the Milky Way galaxy. Although it is very huge and can fit around 1,400,000 earths inside it, the sun is smaller than the other stars. The sun consists almost entirely of hydrogen and helium gas. At its Centre, the temperature is very high and it helps in turning hydrogen into helium. This produces a lot of energy which keeps the sun shining. The sun lies at the centre of the solar system and there are eight planets in the solar system. Among these planets, the earth is the only planet which has water, which is needed for life to exist. The earth's distance from the sun produces exactly the right temperature range needed for living organisms to survive.

On the basis of your reading, answer these questions.

1. What is the sun?

2. Name the gases found in the sun.

3. Fill in the blanks with the words from the passage.

a) The earth is the only planet which has_____.

b) At sun's centre, the _____ is very _____ and it helps in turning_____ into _____.

4. Find words in the passage which mean the same as the following words.

middle _____

correct _____

Q3. Write the meaning of the following words.

levelled _____

citizens _____

stinging _____

sympathy _____

planks _____

sultry _____

overcome _____

cooed _____

Q4. Answer the following questions.

1. How did the child overcome her fear in the story 'Thunder Cake'?

2. How do you leave behind more sympathy when you show sympathy to someone?

3. Why did Chuskit's grandfather has tears in his eyes when he saw the bridge being made?

4. How is sympathy wonderful?

5. Why did Abdul wish to help Chuskit?

कार्य पत्रिका 2

कक्षा - पाँच

नाम _____ कक्षा वर्ग _____ दिनांक _____

प्रश्न 1. अनुच्छेद: मेरा प्रिय मित्र लिखिए।

प्रश्न 2. निम्नलिखित प्रश्नों के उत्तर लिखिए।

क. महात्मा बुद्ध ने नगर के संपन्न लोगों से क्या प्रश्न किया?

उत्तर

ख. रत्नाकर सेठ का माथा लज्जा से क्यों झुक गया ?

उत्तर

ग. सुप्रिया कौन थी? उसने बुध से क्या कहा ?

उत्तर

घ. सुप्रिया की बात सुनकर धनी सेठ ने क्या किया ?

उत्तर

Worksheet : 2**Subject: Mathematics****Class: 5****Name:** _____**Class & Sec.** _____**Roll No.** _____**Date:** _____**Q1. Fill in the blanks.**

- a) The predecessor of the smallest 8 – digit number is _____
- b) 1,000,000 is the successor of _____
- c) $5,33,26,245 + 1$ gives the of 4,33,26,245 _____
- d) 2 crore more than 2,65,123 is _____
- e) The product of the place value and face value of 5 in 64,53,216 is _____

Q2. Write in expanded form.

- a) 16,72,35,167

- b) 16,27,35,127

Q3. Tick (✓) the correct option.**1. 99,99,99,999, mark which one is correct.**

- a) Ninety-nine crore ninety-nine lakh nine thousand ninety-nine
- b) Ninety-nine crore ninety-nine lakh nine hundred ninety-nine
- c) Ninety-nine crore ninety-nine lakh ninety-nine thousand nine hundred ninety-nine
- d) Ninety-nine crore ninety-nine lakh ninety-nine thousand nine hundred nine

2. What is the smallest 9-digit number?

- a) 100000001 c) 10000000
b) 100000000 d) None of these

3. Add 10 to smallest 8-digit number.

- a) 10000010 c) 10000001
b) 10000100 d) None of these

4. Six crore seven lakh fifty-four thousand thirty-two, which one is correct?

- a) 607540032 c) 60754032
b) 6754032 d) None of these

5. Which number is 10,000 less than 10000000?

- a) 9999900 c) 999900
b) 9990000 d) 9999000

Q4. Write the numerals in figures.

a) The smallest eight-digit number

b) The smallest nine-digit number

c) The largest seven-digit number

d) The largest eight-digit number

Q5. Write the number names.

a) 43,345 -

b) 3,99,78,746 -

c) 999,888,765 -

Q6. Write the following numbers in roman numerals.

a) 9 -

b) 39 -

c) 75 -

d) 23 -

e) 62 -

Q7. Write each of the following numbers in Hindu -Arabic numerals.

a) XXV -

b) XIV -

c) DCCC -

d) L-

e) XXXVIII -

f) ML -

Worksheet : 2**Subject: Science****Class: 5****Name:** _____ **Class & Sec.** _____ **Roll No.** _____ **Date:** _____**Q1. Answer the following in one word:**

- a) Name two animal which breathe through lungs _____
- b) Name two animal which breed through gills. _____
- c) Name to animals which breathe through spiracles. _____
- d) Name two animals which breathe through moist skin. _____
- e) Which animal have a special mouth part called proboscis. _____
- f) Name an animal which crawl on the land. _____
- g) Name an animal which move on the land by hind limbs. _____
- h) Which animal use flippers for swimming in water. _____
- i) Name an animal which Hibernate during winters. _____
- j) Name two birds which migrate long distances. _____

Q2. Write true (T) or false (F) against following statements.

- a) Fish have streamlined body to swim in water.
- b) Herbivores have sharp incisors to cut their food.
- c) Aestivation is a long winter sleep.
- d) Breeding ground are the places where the animal hunts.
- e) Reptiles like snake have sharp canine to tear flesh.


Q3. Answer the following questions:

- a) Why do animals migrate? Name some animals that migrate and their migration places.
- _____

b) How do fins of a fish helps in its movement?

c) Name some animal that breathe through gills. How do fish breath in water?

d) Draw a well labelled diagram of a fish showing paired fins, unpaired fins and tail fins.



Worksheet : 2**Subject: Social Studies****Class: 5****Name:** _____**Class & Sec.** _____**Roll No.** _____**Date:** _____**Chapter 2 Parallels and Meridians****Q1. Fill in the blanks**

1. The _____ lines drawn on the globe are called parallels.
2. The North Pole lies in the _____ hemisphere.
3. The Tropic of cancer lies in _____ hemisphere.
4. The word 'latitude' originates from Latin word _____ which means wide.
5. The word 'meridian' originates from the Latin word _____ which means mid-day.
6. A _____ is a network of parallels and meridians.
7. _____ is the longest parallel.
8. The prime meridian (0°) is taken as the starting line for all other _____
9. Parallels are lines of _____
10. Meridians are lines of _____

Q2. Define the following terms:

1. Parallels _____

2. Meridians _____

3. Grid _____

4. Pole _____

5. Equator _____
